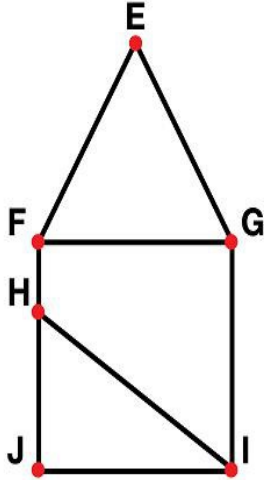


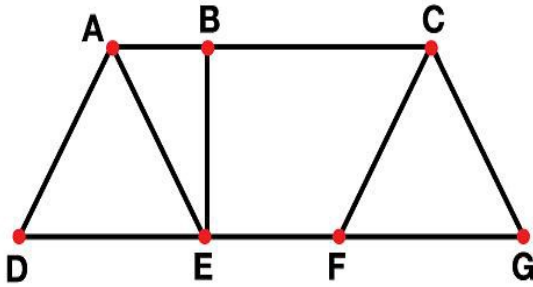
Name: _____

Find the Angles

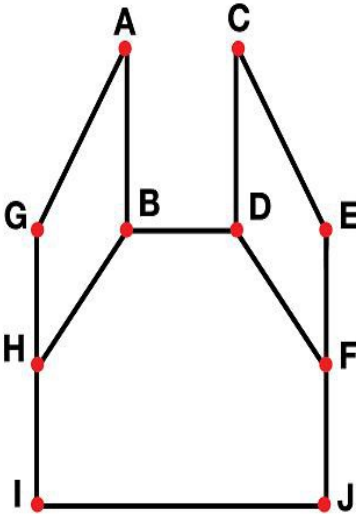
Acute Angles	Obtuse Angles	Right Angles



Acute Angles	Obtuse Angles	Right Angles



Acute Angles	Obtuse Angles	Right Angles

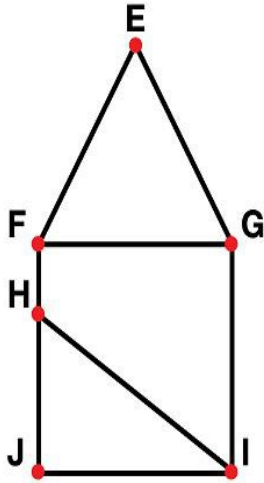


ANSWER KEY

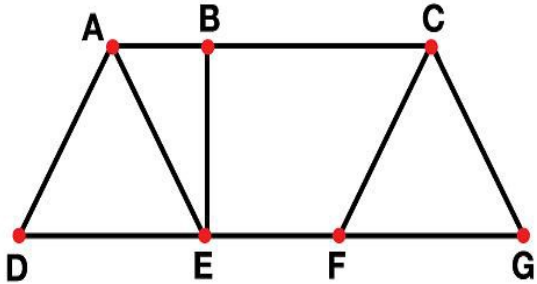
Find the Angles

Answers key may not include all possible answers.

Acute Angles	Obtuse Angles	Right Angles
FEG, JHI, HIJ, IHJ, FGE, EGF, EFG, FEG, GEF, HIG, GIH	FHI, IHF, HFE, EFH, EGI, IGE	HFG, GFH, GIJ, JIG, IJH, HJI



Acute Angles	Obtuse Angles	Right Angles
ADE, EAD, AEB, BEA, BAE, EAB, EDA, DEA, CFG, GFC, CGF, FCG, BCF, FCB	EFC, CFE, BAD, DAB, FEA, AEF	BED, DEB, FEB, BEF, CBE, EBC, ABE, EBA



Acute Angles	Obtuse Angles	Right Angles
GHB, BHG, DFE, EFD, CDE, ECD, GA, BAG	HGA, AGH, ABH, HBA, FDC, CDF, EFC, FEC, IHB, BHI, DFJ, JFD, FEC, CEF, AGH, HGA	ABD, DBA, BDC, CDB, HIJ, JIH, FJI, IJF

